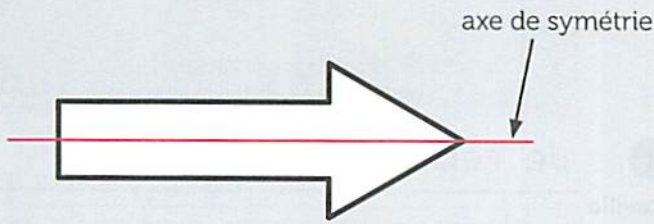



✓ Je sais repérer le ou les axes de symétrie d'une figure.



Cette figure a un axe de symétrie.



Cette figure a deux axes de symétrie.

Repasse en rouge sur le trait en pointillés si c'est un axe de symétrie.

1

The grid contains the following shapes and their dashed lines:

- Butterfly: vertical dashed line (to be traced in red), horizontal dashed line.
- House: vertical dashed line, horizontal dashed line.
- Rectangular ticket: vertical dashed line, horizontal dashed line.
- Heart: vertical dashed line, horizontal dashed line.
- Horizontal capsule: vertical dashed line, horizontal dashed line.
- Square: vertical dashed line, horizontal dashed line, diagonal dashed lines.
- Rectangle: vertical dashed line, horizontal dashed line.
- Triangle: vertical dashed line, horizontal dashed line, diagonal dashed lines.
- Arrow: vertical dashed line, horizontal dashed line.
- Pentagon: vertical dashed line, horizontal dashed line.

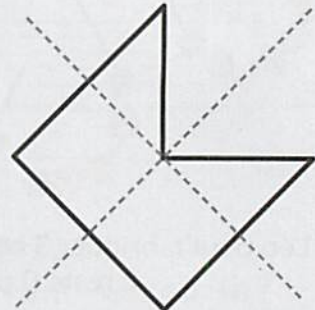
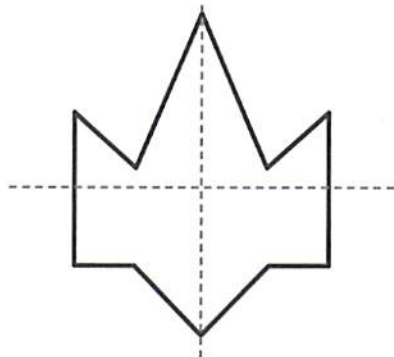
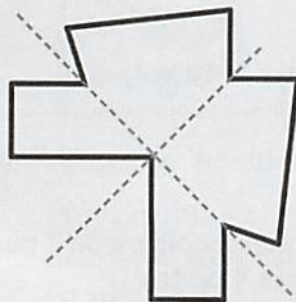
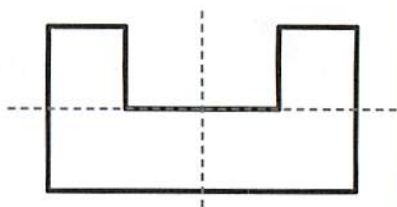
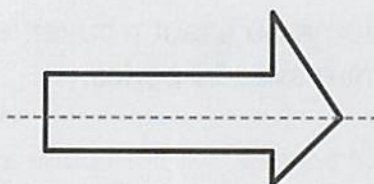
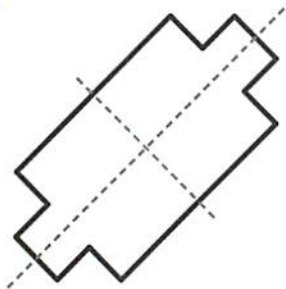
Calcule la somme totale en euros et centimes d'euro.



..... € ..... c


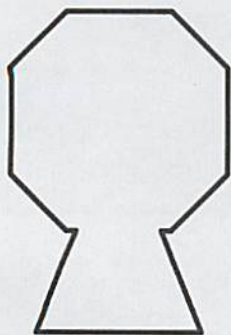
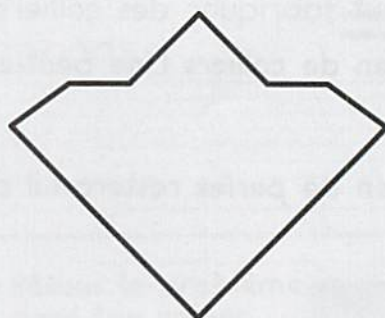
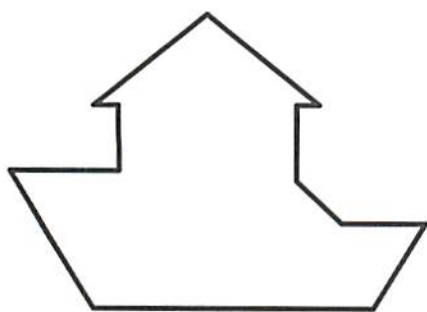
Repasse en rouge sur le trait en pointillés si c'est un axe de symétrie.

2



Trace en rouge l'axe de symétrie si c'est possible.

3



Calcule la somme totale en euros et centimes d'euro.



..... € ..... c